







Fraction Flowers

Find the equivalent fractions for each plant pot by multiplying the numerator and denominator and write them on the flowers.

<p>1.</p>  <p>$\frac{1}{2}$</p>	<p>2.</p>  <p>$\frac{1}{3}$</p>
<p>3.</p>  <p>$\frac{1}{4}$</p>	<p>4.</p>  <p>$\frac{1}{5}$</p>

Can you add another stem to each flower pot? Choose what you will multiply the numerators and denominators by to find more equivalent fractions.



Fraction Flowers Answers

Find the equivalent fractions for each plant pot by multiplying the numerator and denominator and write them on the flowers.

<p>1.</p> <p>$\frac{1}{2}$</p>	<p>2.</p> <p>$\frac{1}{3}$</p>
<p>3.</p> <p>$\frac{1}{4}$</p>	<p>4.</p> <p>$\frac{1}{5}$</p>


Can you add another stem to each flower pot? Choose what you will multiply the numerators and denominators by to find more equivalent fractions.




Fraction Flowers

Find equivalent fractions for each plant pot. Write what you have multiplied by on the leaf and the equivalent fraction on the flower.


1.




2.




5.



3.



4.



Can you add an extra stem to this pot and use division to find an equivalent fraction?



Fraction Flowers

Find equivalent fractions for each plant pot. Write what you have multiplied or divided by on the leaf and the equivalent fraction on the flower.

<p>1.</p> <p>$\frac{5}{10}$</p>	<p>2.</p> <p>$\frac{2}{6}$</p>	<p>5.</p> <p>$\frac{10}{15}$</p>
<p>3.</p> <p>$\frac{6}{8}$</p>	<p>4.</p> <p>$\frac{2}{12}$</p>	

Can you add any more stems by finding more equivalent fractions?